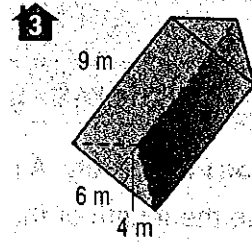
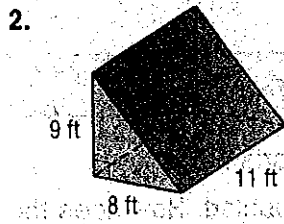
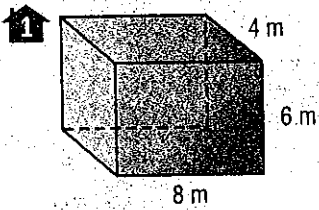
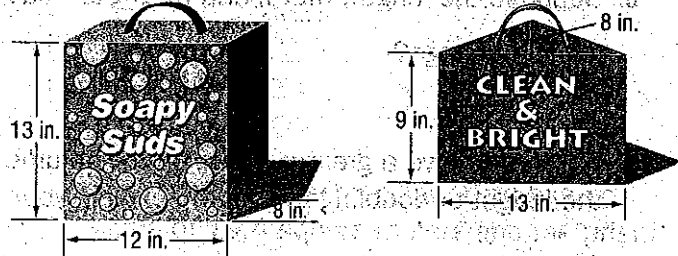


Find the volume of each prism. Round to the nearest tenth if necessary.

(Examples 1-2)



4. Which container holds more detergent?
Justify your answer.

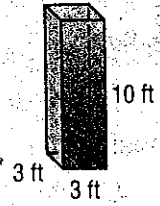


5. The diagram shows the dimensions of an office. It costs about \$0.11 per year to air condition one cubic foot of space. On average, how much does it cost to air condition the office for one month?

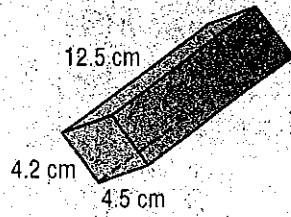


Find the volume of each prism. Round to the nearest tenth if necessary.

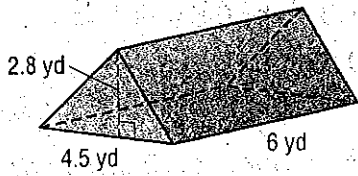
6.



7.



8.



9.

