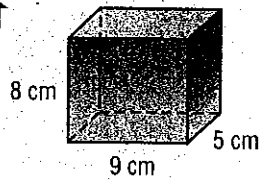



Find the surface area of each rectangular prism. Round to the nearest tenth if necessary.



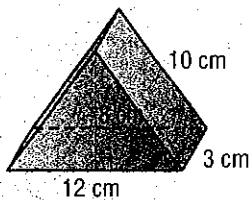
2.



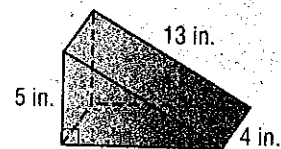
3. When making a book cover, Anwar adds an additional 20 square inches to the surface area to allow for overlap. How many square inches of paper will Anwar use to make a book cover for a book 11 inches long, 8 inches wide, and 1 inch high?

Find the surface area of each triangular prism.

4.

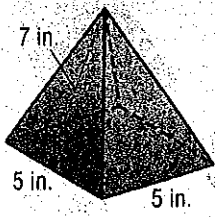


5.

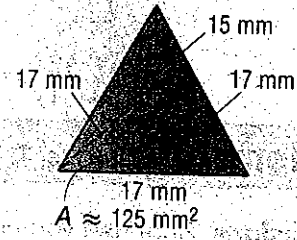


Find the total surface area of each pyramid. Round to the nearest tenth.

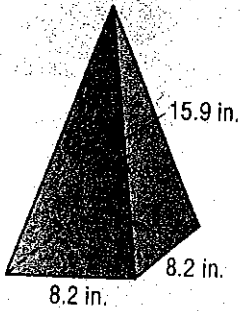
6.



7.



8.



9.

