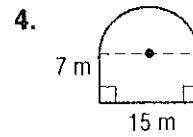
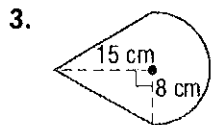
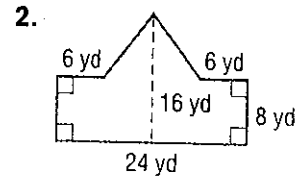
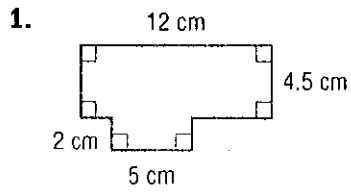
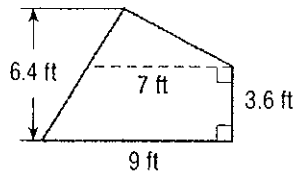


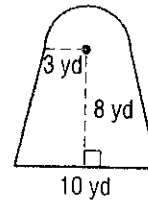
Find the area of each figure. Round to the nearest tenth if necessary. (Example 1)



5.

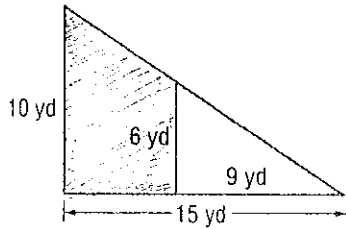


6.



Find the area of the shaded region. Round to the nearest tenth if necessary.

7.



8.

